


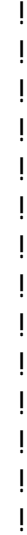




!"#\$%&'() *+(-.#/0(10%&'(!23./40(



" # \$ % & ' ! () * + , ' - ! % . (' / !

$0^* - + \$ 1' !$	$0^* - (") ' !$	$02" 13' !$
-------------------	-------------------	-------------

Mr. Jones has 6 parrots in his classroom. How many parrots does he have in his classroom?



Farmer Hank has 6 more than 7 horses. He has 4 horses. How many horses does he have?

In the morning, it rained 3 inches. Then in the afternoon, it rained 6 inches. How much did it rain in all?

53. Antonio has 29 cookies. Thirteen of the cookies are chocolate chip. The rest are oatmeal. How many cookies are oatmeal?

[REDACTED]

AA had 7 people in his deck.

[REDACTED]

[REDACTED]

[REDACTED]

- 4, %\$(, \$0" %\$&' !() *+, ' - !%. (' /!

' 54" ,!3) * 4(!	0* - (")\$/* 1!	0* - +\$1" %\$* 1/!
------------------	-----------------	---------------------

!

Mr. Thompson sold 6 cartons of cherries at the
ds. 5. / At Saturday. Each carton hol

!

!

!

!

!

!

!

!

!

!

!

!

!

!

!

!

!

!

!

!

140. Tammy has 7 trophies. Her mom has twice as many trophies as Tammy.

How many trophies does her mom have?

If a scuba diver could carry 36 coins to the surface in

Franklin and Eleanor Roosevelt. How many of each kind of coin would he have?

There are 27 large T-shirts and 15 small T-shirts in a box. Each T-shirt costs \$9.
What is the cost of all the T-shirts in the box?

4. Janice buys 3 bags of 100 pretzels and 2 bags of 10 pretzels.

Janice has 29 pretzels after she eats 5 pretzels. How many pretzels did she give away?
Her 5 friends will each receive the same number of pretzels. How many pretzels did she give to each friend?
How many pretzels did she give to each friend?

- A. $10 \times 100 + 5 \times 10 = 105$
- B. $18 \times 5 + 16 = 74$
- C. $18 + 16 + 5 = 29$
- D. $18 \times 5 + 16 = 106$